

TRANSPORTNI UREĐAJI

VJEŽBE - 03

asistent: Matija Hoić, mag. ing. mech.

ZADATAK 8 (1)

Za vježbu....

Za ručni mehanizam dizanja prema slici poznato je:

$$v_1 = 1 \text{ m/s};$$

$$r = 0,35\text{m};$$

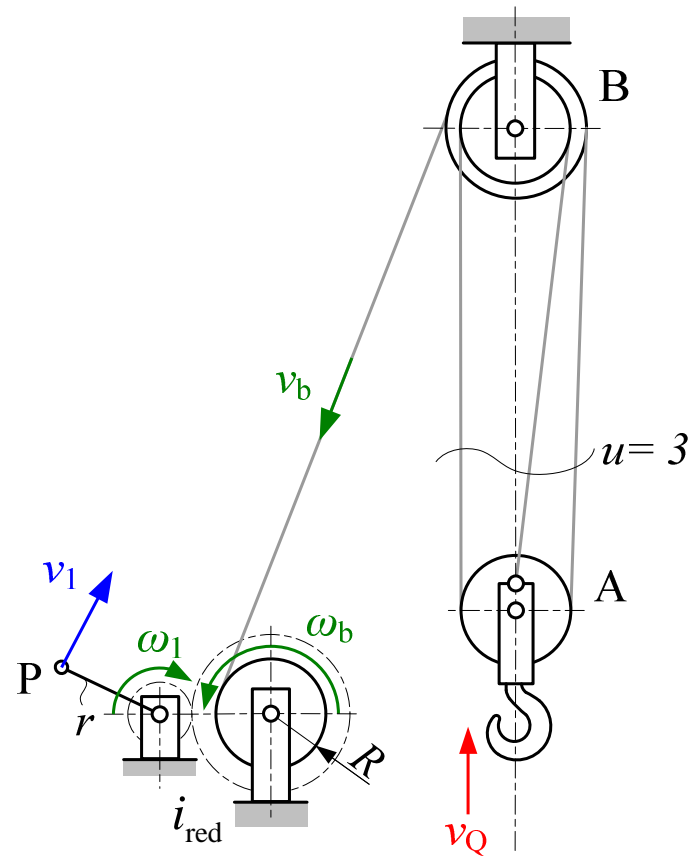
$$R = 0,15\text{m};$$

$$i_{\text{red}} = 6;$$

Odrediti brzinu dizanja tereta v_2

$$v_2 = v_1 \cdot \frac{R}{i_{\text{red}} \cdot r \cdot u} = 1 \cdot \frac{0,15}{6 \cdot 0,35 \cdot 3} = 1 \cdot \frac{1}{42} = 0,0238$$

$$i_{\text{uk}} = i_{\text{red}} \cdot u \cdot \frac{r}{R} = 42$$

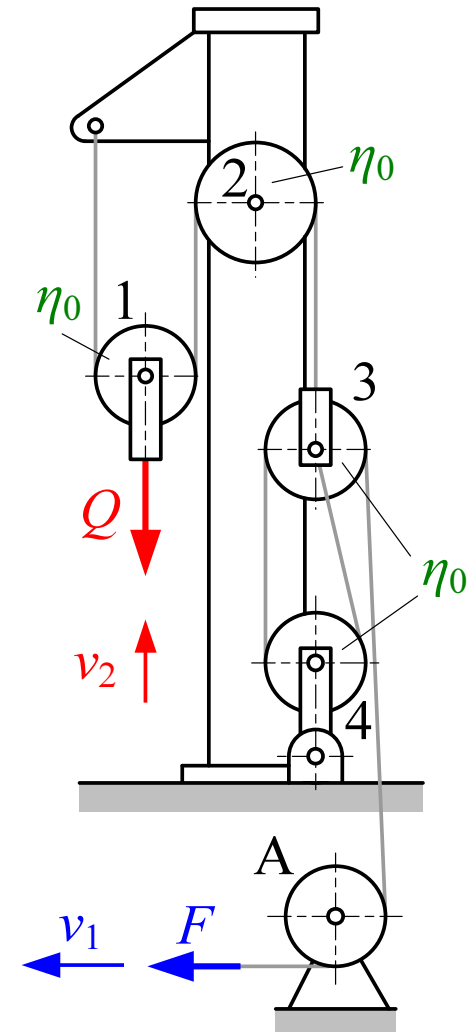


ZADATAK 4 (1)

Koloturnik za dizanje tereta prema slici ima pojedinačnu iskoristivost svake užnice $\eta_0 = 0,98$ (valjni ležajevi).

Izračunati:

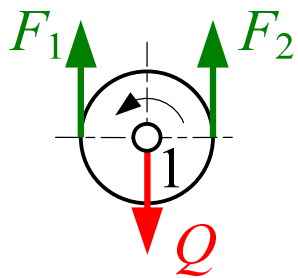
- prijenosni odnos koloturnika – vježbe 02;
- odnos F/Q pri jednolikom dizanju i spuštanju tereta
- rezultirajuću silu na osovini užnice A.



ZADATAK 4 (6)

b) odnos F/Q pri jednolikom dizanju i spužtanju tereta

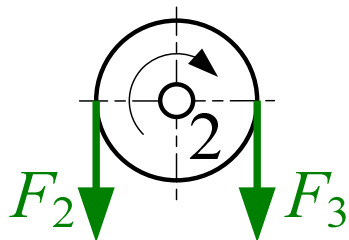
UŽNICA 1



$$\left. \begin{aligned} F_2 > F_1 &\Rightarrow F_1 = F_2 \cdot \eta_0 \\ Q &= F_1 + F_2 \end{aligned} \right\}$$

$$F_2 = \frac{Q}{1 + \eta_0}$$

UŽNICA 2



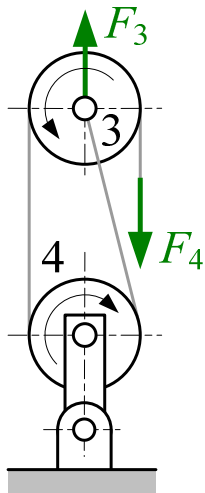
$$F_3 > F_2 \Rightarrow F_2 = F_3 \cdot \eta_0$$

$$F_3 = \frac{Q}{(1 + \eta_0) \cdot \eta_0}$$



ZADATAK 4 (7)

UŽNICE 3 i 4



$$F_3 = \frac{Q}{(1+\eta_0) \cdot \eta_0} \quad v_8 = 6 \cdot v_2 \quad v_6 = 2 \cdot v_2$$
$$\eta_{\text{fk2,r}} = \frac{1}{u_2} \cdot \frac{1-\eta_0^{u_2}}{1-\eta_0} = \frac{1}{3} \cdot \frac{1-0,98^3}{1-0,98} = 0,98013$$



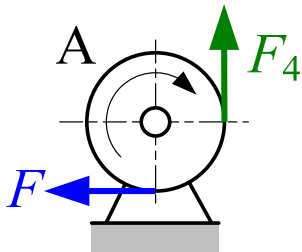
ZAKON OČUVANJA
ENERGIJE

$$\eta_{\text{fk2,r}} \cdot F_4 \cdot v_8 = F_3 \cdot v_6$$

$$\eta_{\text{fk2,r}} \cdot F_4 \cdot 6 \cdot v_2 = \frac{Q}{(1+\eta_0) \cdot \eta_0} \cdot 2 \cdot v_2 \quad \Rightarrow \quad F_4 = \frac{Q}{3 \cdot (1+\eta_0) \cdot \eta_0 \cdot \eta_{\text{fk2,r}}}$$

ZADATAK 4 (8)

SKRETNI UŽETNIK



$$F > F_4 \Rightarrow F_4 = F \cdot \eta_0$$

$$F \cdot \eta_0 = \frac{Q}{3 \cdot (1 + \eta_0) \cdot \eta_0 \cdot \eta_{fk2,r}}$$

$$\frac{F}{Q} = \frac{1}{3 \cdot (1 + \eta_0) \cdot \eta_0^2 \cdot \eta_{fk2,r}} = \frac{1}{3 \cdot (1 + 0,98) \cdot 0,98^2 \cdot 0,98013} = 0,178845$$

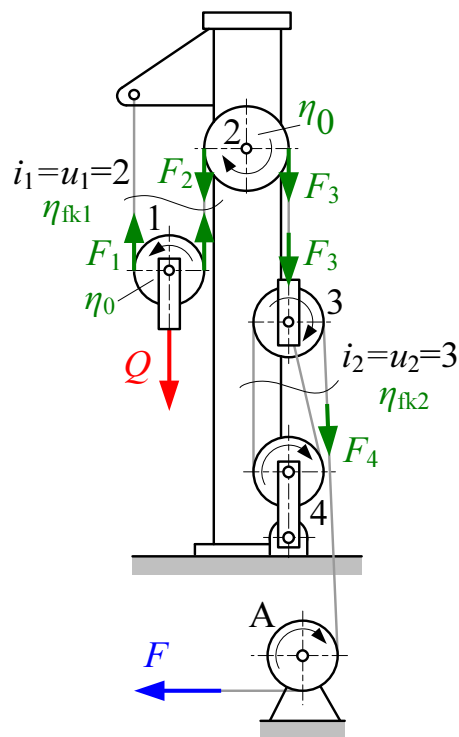


ZADATAK 4 (8)

BEZ GUBITAKA

$$\frac{F}{Q} = \frac{1}{3 \cdot (1+1) \cdot 1^2 \cdot 1} = \frac{1}{6} \approx 0,1666$$

SKRAĆENO



$$\left. \begin{aligned} F_1 &= F_2 \cdot \eta_0 \\ Q &= F_1 + F_2 \end{aligned} \right\} F_2 = \frac{Q}{1 + \eta_0}$$

$$F_3 > F_2 \Rightarrow F_2 = F_3 \cdot \eta_0 \Rightarrow F_3 = \frac{Q}{(1 + \eta_0) \cdot \eta_0}$$

$$F_4 = \frac{F_3 \cdot i_2}{\eta_{fk2,r}} \Rightarrow F_4 = \frac{Q}{i_2 \cdot (1 + \eta_0) \cdot \eta_0 \cdot \eta_{fk2,r}} \quad \eta_{fk2,r} = \frac{1}{u_2} \frac{1 - \eta_0^{u_2}}{1 - \eta_0}$$

$$F_4 = F \cdot \eta_0 \Rightarrow \frac{F}{Q} = \frac{1}{3 \cdot (1 + \eta_0) \cdot \eta_0^2 \cdot \eta_{fk2,r}} = 0,1788$$

ZADATAK 4 (9)

JOŠ KRAĆE

$$F \cdot \eta_{\text{uk},r} = \frac{Q}{i_{\text{uk}}} \quad \Rightarrow \quad \frac{F}{Q} = \frac{1}{i_{\text{uk}} \cdot \eta_{\text{uk},r}} = \frac{1}{6 \cdot 0,9319} = 0,17885$$

$$i_{\text{uk}} = i_{\text{fk1}} \cdot i_{\text{fk2}} = 2 \cdot 3 = 6$$

$$\eta_{\text{uk},r} = \eta_0 \cdot \eta_{\text{fk2},r} \cdot \eta_0 \cdot \eta_{\text{fk1},r} = 0,98 \cdot 0,99 \cdot 0,98 \cdot 0,98013 = 0,9319$$

$$\eta_{\text{fk1},r} = \frac{1}{u_1} \cdot \frac{1 - \eta_0^{u_1}}{1 - \eta_0} = \frac{1 + \eta_0}{2} = 0,99$$

$$\eta_{\text{fk2},r} = \frac{1}{u_2} \cdot \frac{1 - \eta_0^{u_2}}{1 - \eta_0} = 0,98013$$




ZADATAK 4 (9)

ODNOS $\frac{F}{Q}$ PRI JEDNOLIKOM SPUŠTANJU TERETA

$$\frac{F}{Q} = \frac{1}{i_{uk}} \cdot \eta_{uk,k} = \frac{1}{6} \cdot 0,9306 = 0,1551$$

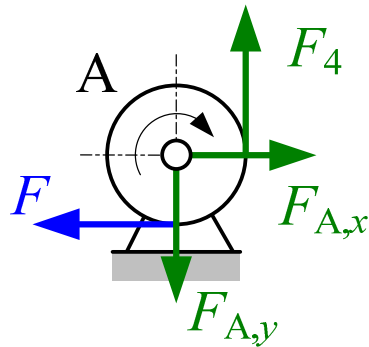
$$\eta_{uk,k} = \left(2 - \frac{1}{\eta_{fk1,r}}\right) \cdot \left(2 - \frac{1}{\eta_0}\right)^2 \cdot \left(2 - \frac{1}{\eta_{fk2,r}}\right)$$

$$\eta_{uk,k} = \left(2 - \frac{1}{0,99}\right) \cdot \left(2 - \frac{1}{0,98}\right)^2 \cdot \left(2 - \frac{1}{0,98013}\right) = 0,9306$$



ZADATAK 4 (10)

REZULTIRAJUĆA SILA NA OSOVINI UŽNICE A



$$\begin{aligned}\sum F_x &= 0 & F_{A,x} &= F \\ \sum F_y &= 0 & F_{A,y} &= F_4 \\ F < F_4 & \Rightarrow & F_4 &= F \cdot \eta_0\end{aligned}$$

$$F_A = \sqrt{F_{A,x}^2 + F_{A,y}^2}$$

$$F_{A,x} = F = 0,1788 \cdot Q$$

$$F_{A,y} = F_4 = F \cdot \eta_0 = 0,1788 \cdot Q \cdot 0,98 = 0,17527 \cdot Q$$

$$F_A = \sqrt{(0,1788 \cdot Q)^2 + (0,17527 \cdot Q)^2}$$

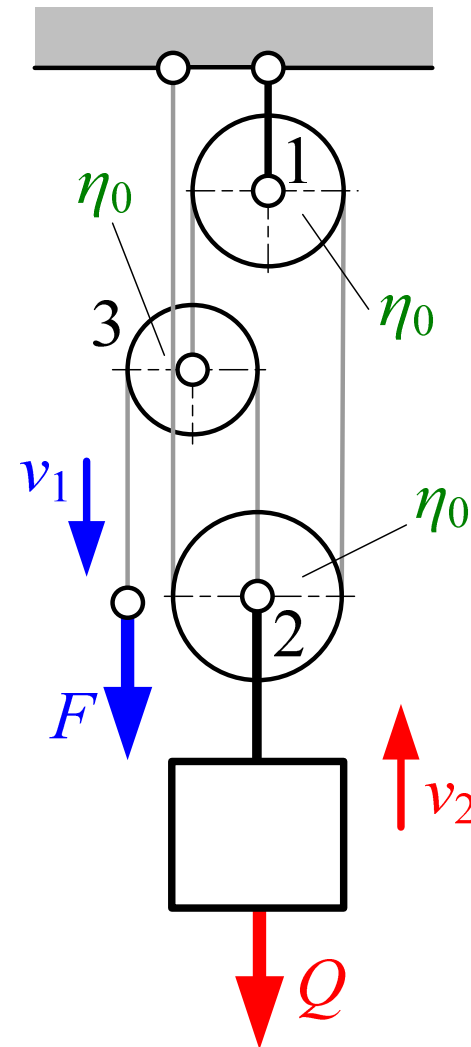
$$F_A = 0,25041 \cdot Q$$

ZADATAK 6 (1)

Za koloturnik prema slici odrediti

- prijenosni odnos v_1/v_2 – vježbe 02
- stupanj iskoristivosti pri dizanju i spuštanju tereta
- veličinu sile F pri jednolikom dizanju i jednolikom spuštanju tereta.

Pojedinačni stupanj iskoristivosti užnica je $\eta_0 = 0,98$ (valjni ležajevi).



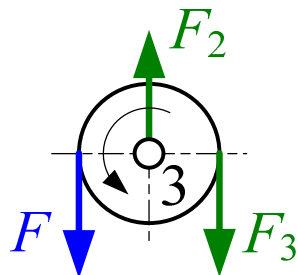
ZADATAK 6 (5)

b) stupanj iskoristivosti pri dizanju i spuštanju tereta

$$\eta_r = \frac{F_{te}}{F}$$

$$F_{te} v_1 = Q v_2 \quad \Rightarrow \quad F_{te} = Q \frac{v_2}{v_1} = \frac{Q}{i_{kol}} = \frac{Q}{5}$$

UŽNICA 3



$$F + F_3 = F_2$$

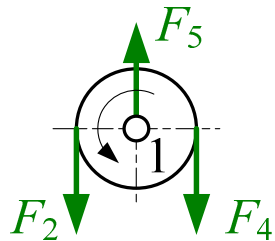
$$F > F_3 \quad \Rightarrow \quad F_3 = F \eta_0$$

$$F_2 = F(1 + \eta_0)$$



ZADATAK 6 (6)

UŽNICA 1



$$\left. \begin{aligned} F_5 &= F_2 + F_4 \\ F_2 > F_4 &\Rightarrow F_4 = F_2 \cdot \eta_0 \end{aligned} \right\} F_5 = F_2 \cdot (1 + \eta_0)$$

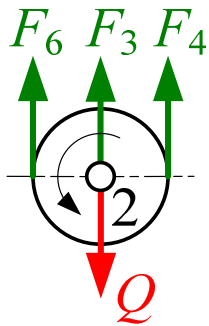
$$\left. \begin{aligned} F_2 &= F(1 + \eta_0) \\ F_4 &= F_2 \cdot \eta_0 \end{aligned} \right\} F_4 = F \cdot (1 + \eta_0) \cdot \eta_0$$

$$\left. \begin{aligned} F_2 &= F(1 + \eta_0) \\ F_5 &= F_2 \cdot (1 + \eta_0) \end{aligned} \right\} F_5 = F \cdot (1 + \eta_0)^2$$



ZADATAK 6 (7)

UŽNICA 2



$$F_4 + F_3 + F_6 = Q$$


$$F_4 > F_6 \Rightarrow F_6 = F_4 \cdot \eta_0$$

$$\left. \begin{array}{l} F_4 = F \cdot (1 + \eta_0) \cdot \eta_0 \\ F_6 = F_4 \cdot \eta_0 \end{array} \right\} F_6 = F \cdot (1 + \eta_0) \cdot \eta_0^2$$

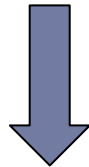


ZADATAK 6 (7)


$$F_4 = F \cdot (1 + \eta_0) \cdot \eta_0$$



$$F_3 = F \eta_0$$



$$F_6 = F \cdot (1 + \eta_0) \cdot \eta_0^2$$



$$F_4 + F_3 + F_6 = Q \quad \longrightarrow \quad F = \frac{Q}{\eta_0 (2 + 2\eta_0 + \eta_0^2)}$$

$$\eta_r = \frac{F_{te}}{F} = \frac{\frac{Q}{i_{kol}}}{\frac{Q}{\eta_0 (2 + 2\eta_0 + \eta_0^2)}} = \frac{\eta_0 (2 + 2\eta_0 + \eta_0^2)}{i_{kol}} = 0,9644$$

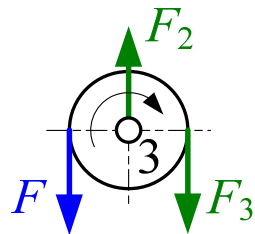


ZADATAK 6 (8)

SPUŠTANJE TERETA

$$\eta_k = \frac{F_k}{F_{te}}$$

UŽNICA 3



$$F + F_3 = F_2$$

$$F_3 > F \Rightarrow F_3 = F/\eta_{0,k}$$

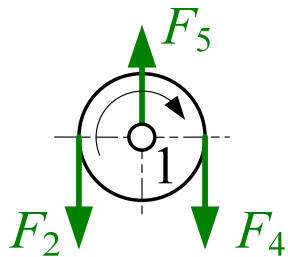
$$F_2 = F \cdot \left(1 + 1/\eta_{0,k}\right)$$

$$\left(\eta_{0,k} = 2 - \frac{1}{\eta_0} \right)$$



ZADATAK 6 (9)

UŽNICA 1



$$\left. \begin{array}{l} F_5 = F_2 + F_4 \\ F_4 > F_2 \Rightarrow F_4 = F_2 / \eta_{0,k} \end{array} \right\} F_5 = F_2 \cdot \left(1 + 1/\eta_{0,k}\right)$$

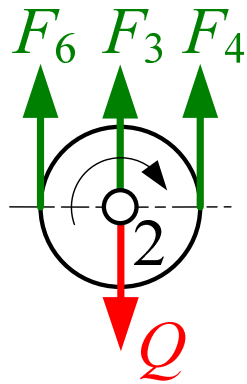
$$\left. \begin{array}{l} F_2 = F \cdot \left(1 + 1/\eta_{0,k}\right) \\ F_4 = F_2 / \eta_{0,k} \end{array} \right\} F_4 = F \cdot \left(1 + 1/\eta_{0,k}\right) / \eta_{0,k}$$

$$\left. \begin{array}{l} F_2 = F \cdot \left(1 + 1/\eta_{0,k}\right) \\ F_5 = F_2 \cdot \left(1 + 1/\eta_{0,k}\right) \end{array} \right\} F_5 = F \cdot \left(1 + 1/\eta_{0,k}\right)^2$$



ZADATAK 6 (10)

UŽNICA 2



$$F_4 + F_3 + F_6 = Q$$

$$F_6 > F_4 \implies F_6 = F_4 / \eta_{0,k}$$


$$\left. \begin{aligned} F_4 &= F \cdot \left(1 + 1/\eta_{0,k}\right) / \eta_{0,k} \\ F_6 &= F_4 / \eta_{0,k} \end{aligned} \right\}$$

$$F_6 = F \left(1 + 1/\eta_{0,k}\right) / \eta_{0,k}^2$$



ZADATAK 6 (11)

$$F_3 = F/\eta_{0,k} \quad F_4 = F \cdot (1+1/\eta_{0,k})/\eta_{0,k} \quad F_6 = F (1+1/\eta_{0,k})/\eta_{0,k}^2$$



$$F_4 + F_3 + F_6 = Q \quad \longrightarrow \quad F_k = Q \frac{\eta_{0,k}^3}{1 + 2\eta_{0,k} + 2\eta_{0,k}^2}$$

$$\eta_r = \frac{F_{te}}{F_k} = \frac{\frac{Q}{i_{kol}}}{Q \frac{\eta_{0,k}^3}{1 + 2\eta_{0,k} + 2\eta_{0,k}^2}} = \frac{i_{kol} \eta_{0,k}^3}{1 + 2\eta_{0,k} + 2\eta_{0,k}^2} = 0,96345$$




ZADATAK 6 (11)

veličinu sile F pri jednolikom dizanju i jednolikom spuštanju tereta.

$$F_r = \frac{Q}{i_{\text{kol}} \eta_r} = \frac{Q}{5 \cdot 0,9644} = 0,2074 Q$$

$$F_k = \frac{Q}{i_{\text{kol}}} \eta_k = Q \frac{0,96345}{5} = 0,19269 Q$$

$$F_{\text{te}} = \frac{Q}{i_{\text{kol}}} = \frac{Q}{5} = 0,2 \cdot Q$$



ZADATAK 7 (1)

Za vježbu....

Ležajevi užetnika su valjni. Kolika je iskoristivost tog koloturnika pri dizanju tereta? Koliki su dodatni otpori vožnje uslijed otpora gibanju užeta kroz koloturnik?

