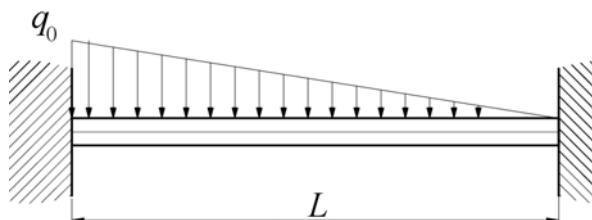


## Rješenja 1. kolokvija od 19.04.2011. iz kolegija NUMERIČKE METODE U STROJARSTVU

1. Izvesti izraz za rješavanje problema štapa opterećenog na savijanje Galerkinovom metodom. Za nosač zadan i opterećen prema slici potrebno je primjenom Galerkinove metode postaviti jednadžbe za određivanje pomaka. Za pretpostavljenu funkciju pomaka uzeti:

$$\bar{w} = a_1 \left( \frac{x}{L} \right)^2 \left( 1 - \frac{x}{L} \right)^2.$$

Zadano:  $L, EI = konst., q_0$ .



○ Geometrijski rubni uvjeti:

$$\bar{w}(x=0) = 0, \bar{w}(x=L) = 0, \frac{d\bar{w}}{dx}(x=0) = 0, \frac{d\bar{w}}{dx}(x=L) = 0.$$

$$\bar{w} = a_1 \left( \frac{x}{L} \right)^2 \left( 1 - \frac{x}{L} \right)^2 : 0 = a_1 (0)^2 (1)^2 \text{ zadovoljava, } 0 = a_1 (1)^2 (0)^2 \text{ zadovoljava.}$$

Derivacija pretpostavljene funkcije je

$$\frac{d\bar{w}}{dx} = a_1 \left[ 2 \left( \frac{x}{L} \right) \frac{1}{L} \left( 1 - \frac{x}{L} \right)^2 + 2 \left( \frac{x}{L} \right)^2 \left( 1 - \frac{x}{L} \right) \left( -\frac{1}{L} \right) \right] : 0 = a_1 \left[ 2(0) \frac{1}{L} (1)^2 + 2(0)^2 (1) \left( -\frac{1}{L} \right) \right]$$

zadovoljava,  $0 = a_1 \left[ 2(1) \frac{1}{L} (0)^2 + 2(1)^2 (0) \left( -\frac{1}{L} \right) \right]$  zadovoljava. Predložena funkcija zadovoljava rubne uvjete pomaka.

Izvod jednadžbe Galerkinove metode za rješavanje problema savijanja tankih štapova je u knjizi Uvod u numeričke metode u strojarstvu, Jurica Sorić, stranica 61. Jednadžba glasi:

$$\int_0^l \left( EI_y \frac{d^2 \bar{w}}{dx^2} \frac{d^2 f_i}{dx^2} - q_z f_i \right) dx + \left[ f_i EI_y \frac{d^3 \bar{w}}{dx^3} \right]_0^l - \left[ \frac{df_i}{dx} EI_y \frac{d^2 \bar{w}}{dx^2} \right]_0^l = 0.$$

Težinska funkcija

$$f_1 = \left( \frac{x}{L} \right)^2 \left( 1 - \frac{x}{L} \right)^2.$$

$$\frac{d^2 \bar{w}}{dx^2} = a_1 \left[ 4 \left( \frac{x}{L} \right) \frac{1}{L} \left( 1 - \frac{x}{L} \right) \left( -\frac{1}{L} \right) + 4 \left( \frac{x}{L} \right) \frac{1}{L} \left( 1 - \frac{x}{L} \right) \left( -\frac{1}{L} \right) + 2 \left( \frac{1}{L} \right)^2 \left( 1 - \frac{x}{L} \right)^2 + 2 \left( \frac{x}{L} \right)^2 \left( -\frac{1}{L} \right)^2 \right] =$$

$$a_1 \left( 2 \left( \frac{x}{L} \right)^2 \left( \frac{1}{L} \right)^2 - 8 \left( \frac{x}{L} \right) \left( 1 - \frac{x}{L} \right) \left( \frac{1}{L} \right)^2 + 2 \left( \frac{1}{L} \right)^2 \left( 1 - \frac{x}{L} \right)^2 \right)$$

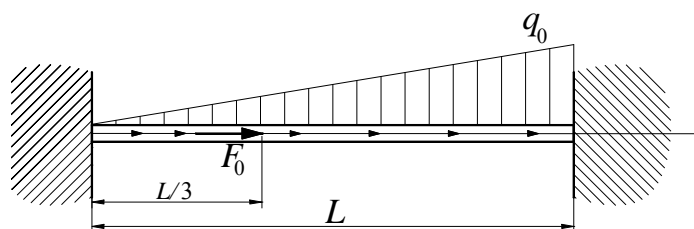
$$\frac{df_1}{dx} = 2 \left( \frac{x}{L} \right) \frac{1}{L} \left( 1 - \frac{x}{L} \right)^2 + 2 \left( \frac{x}{L} \right)^2 \left( 1 - \frac{x}{L} \right) \left( -\frac{1}{L} \right),$$

$$\frac{d^2 f_1}{dx^2} = 2 \left( \frac{x}{L} \right)^2 \left( \frac{1}{L} \right)^2 - 8 \left( \frac{x}{L} \right) \left( 1 - \frac{x}{L} \right) \left( \frac{1}{L} \right)^2 + 2 \left( \frac{1}{L} \right)^2 \left( 1 - \frac{x}{L} \right)^2.$$

$$EI_y \int_0^L a_1 \left( 2 \left( \frac{x}{L} \right)^2 \left( \frac{1}{L} \right)^2 - 8 \left( \frac{x}{L} \right) \left( 1 - \frac{x}{L} \right) \left( \frac{1}{L} \right)^2 + 2 \left( \frac{1}{L} \right)^2 \left( 1 - \frac{x}{L} \right)^2 \right) \\ \left( 2 \left( \frac{x}{L} \right)^2 \left( \frac{1}{L} \right)^2 - 8 \left( \frac{x}{L} \right) \left( 1 - \frac{x}{L} \right) \left( \frac{1}{L} \right)^2 + 2 \left( \frac{1}{L} \right)^2 \left( 1 - \frac{x}{L} \right)^2 \right) dx \\ - q_0 \int_0^L \left( \frac{x}{L} \right)^2 \left( 1 - \frac{x}{L} \right)^2 dx = 0$$

2. Za štap zadan i opterećen prema slici potrebno je primjenom Rayleigh-Ritzove metode odrediti raspodjelu pomaka i uzdužne sile. Za pretpostavljenu funkciju pomaka uzeti:  $\bar{u} = a_1 + a_2x + a_3x^2$ .

Zadano:  $L, AE = \text{konst.}, q_0, F_0 = q_0L$ .



○Geometrijski rubni uvjet:

$$\bar{u}(x=0) = 0, \bar{u}(x=L) = 0$$

Pretpostavljena funkcija pomaka zadovoljava geometrijske rubne uvjete:

$$0 = a_1 + a_2 \cdot 0 + a_3 \cdot 0^2 \Rightarrow a_1 = 0; 0 = a_2L + a_3L^2 \Rightarrow a_2 = -a_3L.$$

Konačno je pretpostavljena funkcija pomaka oblika

$$\bar{u} = a_3x^2 - a_3Lx = a_3(x^2 - Lx).$$

Funkcional za zadani štap je

$$\Pi = \frac{1}{2} AE \int_0^L \left( \frac{d\bar{u}}{dx} \right)^2 dx - \int_0^L q_x \bar{u} dx - [F_0 \bar{u}]_{\frac{L}{3}}^L.$$

$$\Pi = \frac{1}{2} AE \int_0^L (a_3(2x - L))^2 dx - \int_0^L q_0 \frac{x}{L} a_3(x^2 - Lx) dx - [F_0 a_3(x^2 - Lx)]_{\frac{L}{3}}^L.$$

$$\Pi = \frac{1}{2} AE a_3^2 \left( L^3 - 2L^3 + \frac{4L^3}{3} \right) - q_0 a_3 \left( \frac{L^3}{4} - \frac{L^3}{3} \right) - F_0 a_3 \left( \frac{L^2}{9} - \frac{L^2}{3} \right).$$

$$\Pi = \frac{1}{2} AE a_3^2 \left( \frac{L^3}{3} \right) + q_0 a_3 \left( \frac{L^3}{12} \right) + q_0 a_3 \left( \frac{2L^3}{9} \right).$$

$$\frac{\partial \Pi}{\partial a_3} = 0.$$

$$\frac{\partial \Pi}{\partial a_3} = AE a_3 \left( \frac{L^3}{3} \right) + q_0 \left( \frac{11L^3}{36} \right) = 0,$$

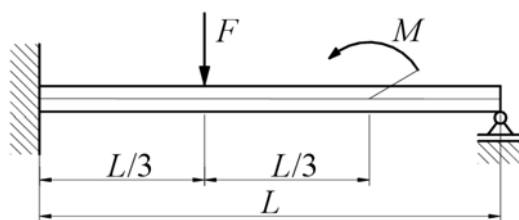
$$a_3 = -\frac{q_0}{AE} \frac{11}{12}, \quad \bar{u} = -\frac{q_0}{AE} \frac{11}{12} (x^2 - Lx).$$

Uzdužna sila:

$$\bar{N}_x = AE \frac{d\bar{u}}{dx}, \quad \bar{N}_x = -q_0 \frac{11}{12} (2x - L).$$

3. Za nosač zadan i opterećen prema slici potrebno je primjenom metode konačnih razlika izvesti sustav jednačbi u matičnom obliku za određivanje nepozantih progiba. Provesti diskretizaciju s  $n = 7$  jednako razmaknutih čvorova. Izvesti izraze za potrebne rubne uvjete. Izvesti izraz za izračunavanje reakcije u zglobnom osloncu.

Zadano:  $L, EI = \text{konst.}, F, M = FL$ .



Zadatku mogu korisno poslužiti sljedeće relacije:

$$w_{i-2} - 4w_{i-1} + 6w_i - 4w_{i+1} + w_{i+2} = \frac{(\Delta x)^3}{EI} F_i,$$

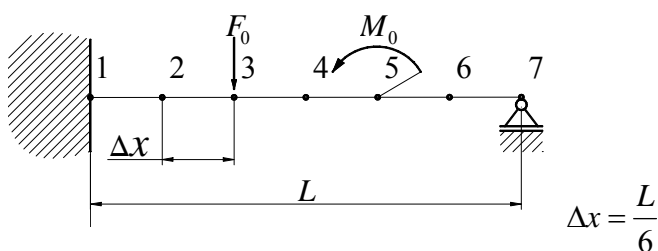
○Geometrijski rubni uvjeti:

$$\bar{w}(x=0) = 0, \bar{w}(x=L) = 0, \frac{d\bar{w}}{dx}(x=0) = 0.$$

○Prirodni rubni uvjeti:

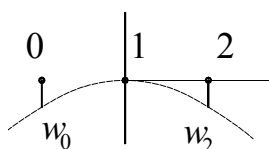
$$M(x=L) = 0.$$

Proračunski model:



Diferencijske jednačbe po čvorovima:

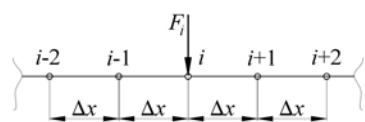
Čvor 2:



$$w_{i-2} = w_i, \quad 7w_i - 4w_{i+1} + w_{i+2} = \frac{(\Delta x)^3}{EI} F_i.$$

$$7w_2 - 4w_3 + w_4 = 0.$$

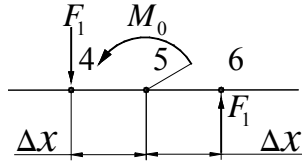
Čvor 3:



$$w_{i-2} - 4w_{i-1} + 6w_i - 4w_{i+1} + w_{i+2} = \frac{(\Delta x)^3}{EI} F_i,$$

$$-4w_2 + 6w_3 - 4w_4 + w_5 = \frac{(\Delta x)^3}{EI} (F_0).$$

Čvor 4:



$$M_0 = F_1 2\Delta x \rightarrow F_1 = \frac{M_0}{2\Delta x} = \frac{6F_0\Delta x}{2\Delta x} = 3F_0.$$

$$w_{i-2} - 4w_{i-1} + 6w_i - 4w_{i+1} + w_{i+2} = \frac{(\Delta x)^3}{EI} F_i$$

$$w_2 - 4w_3 + 6w_4 - 4w_5 + w_6 = \frac{(\Delta x)^3}{EI} 3F_0.$$

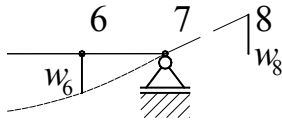
$$w_{i-2} = -w_i, \quad 5w_i - 4w_{i+1} + w_{i+2} = \frac{(\Delta x)^3}{EI} F_i.$$

Čvor 5:

$$w_{i-2} - 4w_{i-1} + 6w_i - 4w_{i+1} + w_{i+2} = \frac{(\Delta x)^3}{EI} F_i$$

$$w_3 - 4w_4 + 6w_5 - 4w_6 = 0.$$

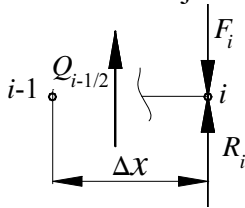
Čvor 6:



$$w_{i+2} = -w_i, \quad 5w_6 - 4w_5 + w_4 = \frac{(\Delta x)^3}{EI} (-3F_0).$$

$$\begin{bmatrix} 7 & -4 & 1 & 0 & 0 \\ -4 & 6 & -4 & 1 & 0 \\ 1 & -4 & 6 & -4 & 1 \\ 0 & 1 & -4 & 6 & -4 \\ 0 & 0 & 1 & -4 & 5 \end{bmatrix} \begin{bmatrix} w_2 \\ w_3 \\ w_4 \\ w_5 \\ w_6 \end{bmatrix} = \frac{F_0 (\Delta x)^3}{EI} \begin{bmatrix} 0 \\ 1 \\ 3 \\ 0 \\ -3 \end{bmatrix}.$$

Izraz za reakciju u zglobnom osloncu:



$$\sum F_z = 0: F_i - R_i - Q_{i-\frac{1}{2}} = 0 \rightarrow R_i = F_i - Q_{i-\frac{1}{2}}.$$

$$Q_{i-\frac{1}{2}} = \frac{dM}{dx} \Big|_{i-\frac{1}{2}}; \quad \frac{dM}{dx} \Big|_{i-\frac{1}{2}} \approx \frac{M_i - M_{i-1}}{\Delta x}; \quad M_i = 0, \quad M_{i-1} \approx -EI \frac{w_i - 2w_{i-1} + w_{i-2}}{(\Delta x)^2}.$$

$$Q_{i-\frac{1}{2}} \approx \frac{0 - EI \frac{-w_i + 2w_{i-1} - w_{i-2}}{(\Delta x)^2}}{\Delta x} = EI \frac{w_i - 2w_{i-1} + w_{i-2}}{(\Delta x)^3}.$$

$$R_i = F_i - \frac{w_i - 2w_{i-1} + w_{i-2}}{(\Delta x)^3} = F_i + EI \frac{2w_5}{(\Delta x)^3}.$$